
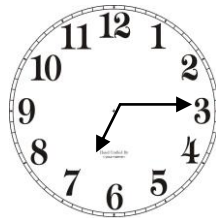




Quelle heure est-il?

1) Relie. Match up.




- 1) Il est cinq heures.
- 2) Il est sept heures et quart.
- 3) Il est onze heures moins le quart.
- 4) Il est neuf heures et demie.


2) Dessine l'heure sur les horloges. Draw the time on the clocks.



Il est quatre heures
moins le quart.



Il est onze heures
et demie.



Il est midi.


0203 565 0539

www.trefoiltutors.co.uk


office@trefoiltutors.co.uk




3) Ecris les phrases. Write out the sentences.



© Mrs J.P. Jones



© Mrs J.P. Jones



© Mrs J.P. Jones

